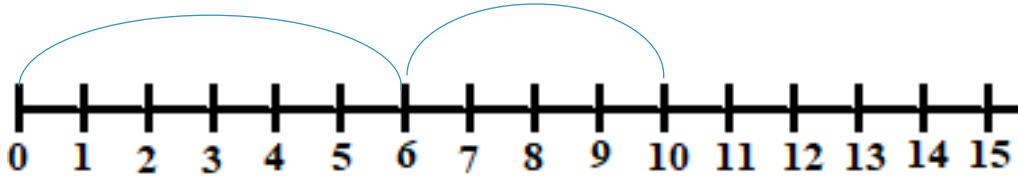


WORKSHEET

नाम -

दिनांक -

जोड़



$$6 + 4 = 10$$

$$6 + 5 = 11$$

$$7 + 3 = \boxed{}$$

$$6 + 6 = \boxed{}$$

$$7 + 8 = \boxed{}$$

$$5 + 5 = \boxed{}$$

$$11 + 4 = \boxed{}$$

$$5 + 4 = \boxed{}$$

$$-- + -- = \boxed{}$$

$$-- + -- = \boxed{}$$

चित्र पर रंग भरें



Remark: _____

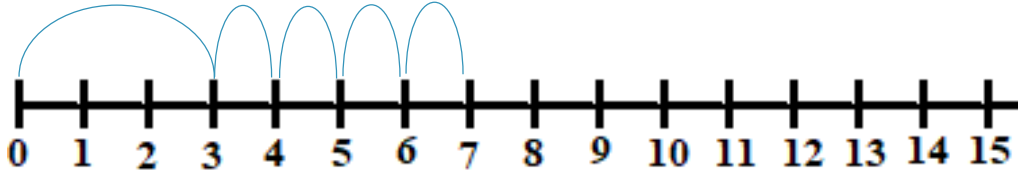
Teacher's Sign _____

WORKSHEET

नाम -

दिनांक -

कितना और जोड़ें



$$3 + 4 = 7$$

$$6 + \square = 10$$

$$2 + \square = 5$$

$$7 + \square = 10$$

$$4 + \square = 8$$

$$7 + \square = 9$$

$$6 + \square = 12$$

$$\square + 10 = 15$$

$$-- + -- =$$

$$-- + -- =$$

चित्र पर रंग भरें



Remark: _____

Teacher's Sign _____

WORKSHEET

नाम -

दिनांक -

जोड़ें

$$\begin{array}{r} 6 \\ + 2 \\ \hline \end{array}$$

$$\begin{array}{r} 8 \\ + 5 \\ \hline \end{array}$$

$$\begin{array}{r} 6 \\ + 6 \\ \hline \end{array}$$

$$\begin{array}{r} 9 \\ + 3 \\ \hline \end{array}$$

$$\begin{array}{r} 12 \\ + 1 \\ \hline \end{array}$$

$$\begin{array}{r} 15 \\ + 3 \\ \hline \end{array}$$

$$\begin{array}{r} 16 \\ + 2 \\ \hline \end{array}$$

$$\begin{array}{r} 13 \\ + 4 \\ \hline \end{array}$$

सबसे बड़े गमले पर सही का निशान लगाकर रंग भरें



$$\begin{array}{r} 12 \\ + 13 \\ \hline \end{array}$$

$$\begin{array}{r} 15 \\ + 13 \\ \hline \end{array}$$

$$\begin{array}{r} 24 \\ + 31 \\ \hline \end{array}$$

$$\begin{array}{r} 46 \\ + 23 \\ \hline \end{array}$$

$$\begin{array}{r} + \\ \hline \end{array}$$

$$\begin{array}{r} + \\ \hline \end{array}$$

$$\begin{array}{r} + \\ \hline \end{array}$$

$$\begin{array}{r} + \\ \hline \end{array}$$



Remark: _____

Teacher's Sign _____

WORKSHEET

नाम -

दिनांक -

एक के साथ जोड़

$$\begin{array}{r} 6 \\ + 1 \\ \hline \end{array}$$

$$\begin{array}{r} 8 \\ + 1 \\ \hline \end{array}$$

$$\begin{array}{r} 6 \\ + 1 \\ \hline \end{array}$$

$$\begin{array}{r} 9 \\ + 1 \\ \hline \end{array}$$

$$\begin{array}{r} 12 \\ + 1 \\ \hline \end{array}$$

$$\begin{array}{r} 15 \\ + 1 \\ \hline \end{array}$$

$$\begin{array}{r} 16 \\ + 1 \\ \hline \end{array}$$

$$\begin{array}{r} 13 \\ + 1 \\ \hline \end{array}$$

सबसे छोटे गमले पर सही का निशान लगाकर रंग भरें।



$$\begin{array}{r} 24 \\ + 11 \\ \hline \end{array}$$

$$\begin{array}{r} 15 \\ + 81 \\ \hline \end{array}$$

$$\begin{array}{r} 28 \\ + 11 \\ \hline \end{array}$$

$$\begin{array}{r} 73 \\ + 11 \\ \hline \end{array}$$

$$\begin{array}{r} + \\ \hline \end{array}$$

$$\begin{array}{r} + \\ \hline \end{array}$$

$$\begin{array}{r} + \\ \hline \end{array}$$

$$\begin{array}{r} + \\ \hline \end{array}$$



Remark: _____

Teacher's Sign _____

WORKSHEET

नाम -

दिनांक -

शून्य के साथ जोड़

$$\begin{array}{r} 5 \\ + 0 \\ \hline \end{array}$$

$$\begin{array}{r} 3 \\ + 0 \\ \hline \end{array}$$

$$\begin{array}{r} 9 \\ + 0 \\ \hline \end{array}$$

$$\begin{array}{r} 6 \\ + 0 \\ \hline \end{array}$$

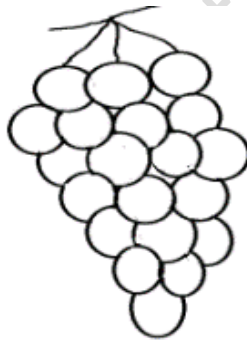
$$\begin{array}{r} 10 \\ + 1 \\ \hline \end{array}$$

$$\begin{array}{r} 15 \\ + 0 \\ \hline \end{array}$$

$$\begin{array}{r} 10 \\ + 7 \\ \hline \end{array}$$

$$\begin{array}{r} 13 \\ + 0 \\ \hline \end{array}$$

अंगूरों की संख्या गिनकर लिखें व रंग भी भरें।



$$\begin{array}{r} 20 \\ + 10 \\ \hline \end{array}$$

$$\begin{array}{r} 30 \\ + 10 \\ \hline \end{array}$$

$$\begin{array}{r} 40 \\ + 20 \\ \hline \end{array}$$

$$\begin{array}{r} 60 \\ + 30 \\ \hline \end{array}$$

$$\begin{array}{r} + \\ \hline \end{array}$$

$$\begin{array}{r} + \\ \hline \end{array}$$

$$\begin{array}{r} + \\ \hline \end{array}$$

$$\begin{array}{r} + \\ \hline \end{array}$$



Remark: _____

Teacher's Sign _____

WORKSHEET

नाम -

दिनांक -

जोड़ें

$$\begin{array}{r} 2 \\ + 2 \\ \hline \end{array}$$

$$\begin{array}{r} 6 \\ + 4 \\ \hline \end{array}$$

$$\begin{array}{r} 9 \\ + 8 \\ \hline \end{array}$$

$$\begin{array}{r} 7 \\ + 7 \\ \hline \end{array}$$

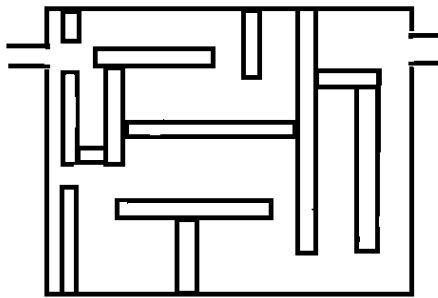
$$\begin{array}{r} 36 \\ + 3 \\ \hline \end{array}$$

$$\begin{array}{r} 25 \\ + 4 \\ \hline \end{array}$$

$$\begin{array}{r} 36 \\ + 2 \\ \hline \end{array}$$

$$\begin{array}{r} 22 \\ + 5 \\ \hline \end{array}$$

आईसक्रीम खाने का रास्ता ढूँढ़ें।



$$\begin{array}{r} 64 \\ + 21 \\ \hline \end{array}$$

$$\begin{array}{r} 75 \\ + 43 \\ \hline \end{array}$$

$$\begin{array}{r} 68 \\ + 61 \\ \hline \end{array}$$

$$\begin{array}{r} 36 \\ + 32 \\ \hline \end{array}$$

$$\begin{array}{r} + \\ \hline \end{array}$$

$$\begin{array}{r} + \\ \hline \end{array}$$

$$\begin{array}{r} + \\ \hline \end{array}$$

$$\begin{array}{r} + \\ \hline \end{array}$$



Remark: _____

Teacher's Sign _____