


WORKSHEET

Name - .....

Date - .....


Add



T	O
1	5
+ 1	5
3	0

1 Ten 5 Ones + 1 Ten 5 Ones = 3 Tens 0 One

15 + 15 = 30



T	O
+	

Tens  Ones +  Ten  Ones =  Tens  Ones

+  =

T	O
3	5
+ 4	5

T	O
2	7
+ 5	4

T	O
4	9
+ 3	5

T	O
4	8
+ 6	8

T	O
+	

T	O
+	



Remark: \_\_\_\_\_

Teacher's Sign \_\_\_\_\_

## WORKSHEET

Name - .....

Date - .....

## Add

$$\begin{array}{r} \text{T O} \\ 57 \\ + 45 \\ \hline \end{array}$$

$$\begin{array}{r} \text{T O} \\ 59 \\ + 23 \\ \hline \end{array}$$

$$\begin{array}{r} \text{T O} \\ 56 \\ + 25 \\ \hline \end{array}$$

$$\begin{array}{r} \text{T O} \\ 14 \\ + 25 \\ \hline \end{array}$$

$$\begin{array}{r} \text{T O} \\ 48 \\ + 26 \\ \hline \end{array}$$

$$\begin{array}{r} \text{T O} \\ 55 \\ + 45 \\ \hline \end{array}$$

$$\begin{array}{r} \text{T O} \\ 13 \\ + 45 \\ \hline \end{array}$$

$$\begin{array}{r} \text{T O} \\ 37 \\ + 27 \\ \hline \end{array}$$

$$\begin{array}{r} \text{T O} \\ 49 \\ + 39 \\ \hline \end{array}$$

$$\begin{array}{r} \text{T O} \\ 78 \\ + 45 \\ \hline \end{array}$$

$$\begin{array}{r} \text{T O} \\ \\ + \\ \hline \end{array}$$

$$\begin{array}{r} \text{T O} \\ \\ + \\ \hline \end{array}$$



Remark: \_\_\_\_\_

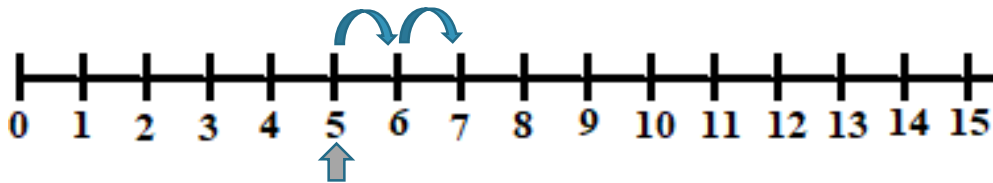
Teacher's Sign \_\_\_\_\_

## WORKSHEET

Name - .....

Date - .....

## Add



$$5 + \boxed{2} = 7$$

Add to find -

$$6 + \boxed{\phantom{0}} = 11$$

$$5 + \boxed{\phantom{0}} = 13$$

$$9 + \boxed{\phantom{0}} = 15$$

$$\boxed{\phantom{0}} + 10 = 14$$

$$\boxed{\phantom{0}} + 18 = 20$$

$$\boxed{\phantom{0}} + 16 = 19$$

T O
1 4
+
4 8

T O
3 2
+
6 8

T O
5 6
+
7 3

T O
2 3
+
9 2

T O
+

T O
+



Remark: \_\_\_\_\_

Teacher's Sign \_\_\_\_\_

WORKSHEET

Name - .....

Date - .....

Add

1- If Ansh had 26 marbles and he won 34 marbles. Now how many marbles he has all?

T	O
2	6
+	3 4
-----	
6	0

60 Marbles

2- Mother gave 15 peanuts to Simran and Father gave 27 peanuts. How many peanuts did she has all ?

T	O
+	
-----	

3- There are 27 cows and 18 buffaloes in a farm of Manish. How many animals are there in farm?

T	O
+	
-----	

4- Aditya has 28 blank match boxes and Sandeep Has 25 blank match boxes. How many blank match boxes they have all?

T	O
+	
-----	

5- \_\_\_\_\_  
\_\_\_\_\_

T	O
+	
-----	



Remark: \_\_\_\_\_

Teacher's Sign \_\_\_\_\_

WORKSHEET

Name - .....

Date - .....

Add

6- If Prince had 47 marbles and he won 25 marbles. Now how many marbles he has all?

T O
+

7- Ritin had 25 candies in his box. His mother gave him 25 more candies. Now how many candies he had all?

T O
+

8- Avanish had 23 rupees. His uncle gave him some rupees. Now he had 58 rupees. So how many rupees his uncle gave him.

T O
+

9- There are 18 girls and 12 boys in a class. How many students are there in a class?

T O
+

10- \_\_\_\_\_  
\_\_\_\_\_

T O
+



Remark: \_\_\_\_\_

Teacher's Sign \_\_\_\_\_

## WORKSHEET

Name - .....

Date - .....

## Add

$$\begin{array}{r} \text{T O} \\ 58 \\ + 45 \\ \hline \end{array}$$

$$\begin{array}{r} \text{T O} \\ 47 \\ + 23 \\ \hline \end{array}$$

$$\begin{array}{r} \text{T O} \\ 56 \\ + 26 \\ \hline \end{array}$$

$$\begin{array}{r} \text{T O} \\ 28 \\ + 37 \\ \hline \end{array}$$

$$\begin{array}{r} \text{T O} \\ 67 \\ + 25 \\ \hline \end{array}$$

$$\begin{array}{r} \text{T O} \\ 56 \\ + 40 \\ \hline \end{array}$$

1. Sanjana had 29 mangoes in her bag. Sonakshi gave her 26 mangoes. Now how many mangoes does she have altogether?

2. Gungun had 45 marbles. Timtim had 32 marbles. How many marbles do they have altogether?



Remark: \_\_\_\_\_

Teacher's Sign \_\_\_\_\_